

## Baseline Labs

FL Standards



### Flower: Basic Tutorials 1-3

- Determine how the **sugar in the water** affects the **petal loss**.
- Determine how the **salt in the water** affects the **petal loss**.
- Determine how the **red dye in the water** affects the **redness of the petals**.



### Ramp: Advanced Tutorials 1-3

- Determine how the **height of the tower** affects the **total distance traveled from the end of the ramp**.
- Determine how the **roughness of the ramp** affects the **time to end of the ramp**.
- Determine how the **size of the sled** affects the **total distance traveled from the end of the ramp**.

*The Practice of Science, Modeling and Simulations, Problem solving and Algorithms*

## Physical Science



### Phase Change

- Determine how the **amount of heat** affects the **boiling point of water**.
- Determine how the **size of the container** affects the **time the water takes to boil**.
- Determine how the **amount of ice** affects the **boiling point of water**.
- Determine how the **amount of ice** affects the **melting point of ice**.

[SC.7.P.11.1](#)



### Chemical Reactions

- Determine how the **substance** added to vinegar impacts the **temperature change**.
- Determine how the **amount of substance** impacts the **temperature change**.
- Determine how the **amount of vinegar** impacts the **temperature change**.

[SC.8.P.9.3](#)



### Collisions: Introduction

- Determine how the **mass of the green ball** affects the **final velocity of the green ball**.
- Determine how the **initial velocity of the red ball** affects the **total final momentum to the right**.
- Determine how the **mass of the red ball** affects the **total final momentum to the right**.

[SC.6.P.13.3](#)

[SC.912.P.12.5](#)



### Collisions: Elastic Billiards

- Determine how the **initial velocity of the green ball** affects the **total final momentum to the right**.
- Determine how the **mass of the red ball** affects the **final velocity of the red ball**.
- Determine how the **initial velocity of the green ball** affects the **final velocity of the green ball**.

[SC.912.P.12.5](#)



### Collisions: Inelastic (Trains)

- Determine how the **initial velocity of the green train** affects the **total final momentum to the right**.
- Determine how the **initial velocity of the red train** affects the **total final momentum to the right**.
- Determine how the **mass of the red train** affects the **final velocity of the red train**.


[SC.6.P.13.3](#)

[SC.912.P.12.5](#)



### Momentum (1): Investigate

- Determine how the **mass of Car #1** affects the **momentum of Car #1 before collision**.
- Determine how the **velocity of Car #1 before collision** affects the **total velocity after collision**.
- Determine how the **velocity of Car #1 before collision** affects the **total momentum after collision**.



### Momentum (3): Predict (Coming Soon)

- Develop a mathematical model and make predictions about how the **mass of Car #1** affects the **momentum of Car #1 before collision**.

- Develop a mathematical model and make predictions about how the **velocity of Car #1 before collision** affects the **total velocity after collision**.
- Develop a mathematical model and make predictions about how the **velocity of Car #1 before collision** affects the **total momentum after collision**.



### Energy (1): Free Fall

[SC.6.P.11.1](#)

- Determine how the **height of the drop** affects the **kinetic energy as the ball hits the ground**.
- Determine how the **height of the drop** affects the **potential energy before the ball is dropped**.
- Determine how the **mass of the ball** affects the **mechanical energy as the ball hits the ground**.

[SC.7.P.11.2](#)

[SC.7.P.11.3](#)



### Energy (2): Air Resistance

[SC.6.P.11.1](#)

- Determine how the **volume of the ball** affects the **kinetic energy as the ball hits the ground**.
- Determine how the **mass of the ball** affects the **thermal energy of the system**.
- Determine how the **volume of the ball** affects the **thermal energy of the system**.

[SC.7.P.11.2](#)

[SC.7.P.11.3](#)



### Forces & Motion (1): Introduction

[SC.6.P.13.1](#)

- Determine how the **roughness of the ramp** impacts the **time to end of the ramp**.
- Determine how the **height of the tower** impacts the **velocity of the sled**.
- Determine how the **mass of the sled** impacts the **force of the sled on the spring**.

[SC.912.P.12.2](#)




### Forces & Motion (2): Gravity

[SC.6.P.13.1](#)

- Determine how the **gravity of the planetary body** impacts the **force of the sled on the spring**.
- Determine how the **gravity of the planetary body** impacts the **time to end of the ramp**.
- Determine how the **gravity of the planetary body** impacts the **velocity of the sled**.

[SC.912.P.12.2](#)



### Gravity and Mass: Introduction

[SC.6.P.13.2](#)

- Determine how the **planetary body we are orbiting** affects the **mass of the gold**.
- Determine how the **planetary body we are orbiting** affects the **weight of the gold**.
- Determine how the **amount of gold** affects the **weight of the gold**.

[SC.8.P.8.2](#)

[SC.912.P.12.4](#)



### Gravity and Orbit Distance

[SC.6.P.13.2](#)

- Determine how the **distance of orbit** affects the **gravity in orbit**.
- Determine how the **distance of orbit** affects the **mass of the gold**.
- Determine how the **distance of orbit** affects the **weight of the gold**.

[SC.8.P.8.2](#)

[SC.912.P.12.4](#)



### Gravitation (1): Investigate

[SC.912.P.12.4](#)

- Determine how the **amount of gold** affects the **force of gravity**.
- Determine how the **distance in orbit** affects the **force of gravity**.
- Determine how the **planet mass** affects the **force of gravity**.



### Gravitation (2): Graph (Coming Soon)

- Develop a mathematical model about how **planet mass** affects **force of gravity**.
- Develop a mathematical model about how **amount of gold** affects **force of gravity**.
- Develop a mathematical model about how **orbit distance** affects **force of gravity**.

MATH



### Gravitation (3): Predict (Coming Soon)

- Develop a mathematical model and make predictions about how **planet mass** affects **force of gravity**.
- Develop a mathematical model and make predictions about how **amount of gold** affects **force of gravity**.
- Develop a mathematical model and make predictions about how **orbit distance** affects **force of gravity**.

MATH



### Liquid Density

[SC.8.P.8.3](#)

- Determine how the **shape of the container** affects the **density of the liquid**.
- Determine how the **amount of liquid** affects the **density of the liquid**.
- Determine how the **type of liquid** affects the **density of the liquid**.



### Motion - Sleds (1): Investigate (Coming Soon)

[SC.6.P.13.1](#)

[SC.912.P.12.2](#)

- Determine how the **height of the tower** affects the **time to end of the ramp**.
- Determine how the **mass of the sled** affects the **momentum at the end of the ramp**.
- Determine how the **roughness of the ramp** affects the **acceleration at the end of the ramp**.



### Motion - Sleds (2): Graph (Coming Soon)

MATH

- Develop a mathematical model about how the **height of the tower** affects the **time to end of the ramp**.
- Develop a mathematical model about how the **mass of the sled** affects the **momentum at the end of the ramp**.
- Develop a mathematical model about how the **roughness of the ramp** affects the **acceleration at the end of the ramp**.



### Motion - Sleds (3): Predict (Coming Soon)

MATH

Develop a mathematical model and make predictions about how the **height of the tower** affects the **time to end of the ramp**.

Develop a mathematical model and make predictions about how the **mass of the sled** affects the **momentum at the end of the ramp**.

Develop a mathematical model and make predictions about how the **roughness of the ramp** affects the **acceleration at the end of the ramp**.



### Velocity (1): Free Fall

[SC.6.P.12.1](#)

- Determine how the **height of the drop** affects the **velocity as the ball hits the ground**.
- Determine how the **mass of the ball** affects the **time to drop**.
- Determine how the **height of the drop** affects the **time to drop**.



### Velocity (2): Air Resistance

[SC.6.P.12.1](#)

- Determine how the **height of the drop** affects the **velocity as the ball hits the ground**.
- Determine how the **mass of the ball** affects the **acceleration as the ball hits the ground**.
- Determine how the **volume of the ball** affects the **force as the ball hits the ground**.
- Determine how the **volume of the ball** affects the **time to drop**.



### Waves - Drum (1): Introduction

[SC.7.P.10.3](#)

[SC.912.P.10.20](#)

- Determine how the **mallet position** influences the **loudness of the sound produced**.
- Determine how the **mallet speed** influences the **pitch of the sound produced**.
- Determine how the **substance in the drum (medium)** influences the **wave speed**.



### Waves and Thermal Energy

[SC.7.P.10.3](#)

[SC.912.P.10.20](#)

- Determine how the **temperature in the drum** influences the **loudness of the sound produced**.
- Determine how the **temperature in the drum** influences the **pitch of the sound produced**.
- Determine how the **temperature in the drum** influences the **wave speed**.



### Waves - String (1): Introduction

[SC.7.P.10.3](#)

[SC.912.P.10.20](#)

- Determine how the **length of the string** impacts the **wave speed**.
- Determine how the **strength of the string** impacts the **loudness of the sound**.
- Determine how the **tension of the string** impacts the **wave frequency**.



### Waves - String (2): Advanced

[SC.912.P.10.20](#)

- Determine how the **loudness** changes.
- Determine how the **wave speed** changes.
- Determine how the **wave frequency** changes.



### Newton's Truck (1): Investigate (Coming Soon)

- Determine how the **mass of the truck** affects the **acceleration of the truck**.
- Determine how the **forward acceleration force** affects the **time to reach 1 kilometer**.
- Determine how the **roughness of the road** affects the **acceleration**.
- Determine how the **mass of the truck** affects the **velocity at 1 kilometer**.



### Truck (3): Predict (Coming Soon)



- Develop a mathematical model and make predictions about how the **mass of the truck** affects **acceleration**.
- Develop a mathematical model and make predictions about how the **roughness of the road** affects **acceleration**.



### Electromagnet (1): Investigate (Coming Soon)

- Determine how the **number of turns** affects the **strength of the magnetic field**.
- Determine how the **amount of current** affects the **strength of the magnetic field**.
- Determine how the **distance between the electromagnet and the piece of metal** affects the **lifting force between them**.



### Electricity and Magnetism (3): Predict (Coming Soon)

- Develop a mathematical model and make predictions about how the **number of turns** affects the **strength of the magnetic field**.
- Develop a mathematical model and make predictions about how the **amount of current** affects the strength of the magnetic field.
- Develop a mathematical model and make predictions about how the **distance between the electromagnet and the piece of metal** affects the **lifting force between them**.

## Life Science



### Body Systems

[SC.6.L.14](#)

- A hiker can't seem to catch their breath because their blood oxygen levels are low. Investigate how **air tank flow** influences **blood oxygen**.
- A hiker is experiencing dizziness and fatigue because their blood sugar levels are low. Investigate how **carbohydrates eaten** influences **blood sugar levels**.
- A hiker is shivering. Their body temperature is at 95 °F, but should be around 98.6 °F. Investigate how **layers of clothing** influence **body temperature**.



### Cells: Animal- Energy and Storage

[SC.6.L.14.2](#)

- The cell cannot break down food. Determine how **lysosomes** impact the **ability to break down food**. [SC.6.L.14.3](#)
- The cell is low on energy. Determine how **mitochondria** impact the **cell's energy**.
- The cell is storing too many nutrients. Determine how **vacuoles** impact the **nutrient storage**.



### Cells: Animal - Function

[SC.6.L.14.2](#)

- The Golgi body is not receiving enough protein. Determine how the **endoplasmic reticulum** impacts the **transportation of protein to the Golgi body**. [SC.6.L.14.4](#)
- The cell is producing too many ribosomes. Determine how **nucleoli** impact the **production of ribosomes**.
- The cell has too much protein. Determine how the **ribosomes** impact the **production of protein**.



### Cells: Plant - Function

[SC.6.L.14.2](#)

- The Golgi body is not receiving enough protein. Determine how the **endoplasmic reticulum** impacts the **transportation of protein to the Golgi body**. [SC.6.L.1](#)
- The cell is producing too many ribosomes. Determine how the **nucleoli** impact the **production of ribosomes**.
- The cell has too much protein. Determine how the **ribosomes** impact the **production of protein**.




### Cells: Plant - Energy & Storage

[SC.6.L.14.2](#)

- The cell is not capturing enough sunlight. Determine how **chloroplasts** impact the **ability to capture sunlight**. [SC.6.L.14.3](#)
- The cell is low on energy. Determine how the **mitochondria** impact the **production of energy**.
- The cell does not have enough storage space. Determine how the **size of the vacuole** impacts the **nutrient storage**.

[SC.7.L.15.2](#)



### Diversity of Traits

[SC.7.L.16.2](#)

- Investigate how **foliage** influences the **presence of red, short furred slinquettes living in the environments**.
- Investigate how a **fur color mutation** influences the **presence of green short furred slinquettes**.

- Investigate how a **fur length mutation** influences the **presence of red, long furred slinquettes**.
- Investigate how **temperature** influences the **presence of red, long furred slinquettes living in the environments**.



### Genetics

- Determine how the **Mother's F alleles** impact the **chance of producing the offspring with red fur**.
- Determine how the **Mother's H alleles** impact the **chance of producing the offspring with horns**.
- Determine how the **Mother's L alleles** impact the **chance of producing the offspring with short fur**.

[SC.7.L.16.1](#)

[SC.7.L.16.2](#)



### Natural Selection

- Investigate the **optimal amount of foliage** for the **green, long furred slinquettes' population**.
- Investigate the **optimal amount of foliage** for the **red, short furred slinquettes' population**.
- Investigate the **optimal temperature** for the **green short furred slinquettes' population**.
- Investigate the **optimal temperature** for the **red, long furred slinquettes' population**.

[SC.7.L.15.2](#)

[SC.7.L.15.3](#)



### Predation: Introduction

- Investigate how **seal birth rate** influences the **maximum shark population**.
- Investigate how **shark birth rate** influences the **maximum seal population**.
- Investigate how a **starting seal population** influences the **length of the predation cycle**.
- Investigate how a **starting shark population** influences the **length of the predation cycle**.

[SC.7.L.17.2](#)

[SC.912.L.17.6](#)



### Predation (2): Cycles

- Investigate how an **initial seal population** influences the **duration of predation cycles**.
- Investigate how **seal birth rate** influences the **final seal population**.
- Investigate how **shark birth rate** influences the **duration of predation cycles**.

[SC.912.L.17.6](#)

## Earth Science



### Eclipses (1): Introduction

- Determine how the **phase of the Moon** affects the **possibility of viewing a lunar eclipse**.
- Determine how the **phase of the Moon** affects the **possibility of viewing a solar eclipse**.
- Determine if the **orbital tilt of the moon** impacts the **average number of lunar eclipses**.
- Determine how the **time of year** impacts the **average number of solar eclipses**.

[SC.8.E.5.9](#)

[SC.912.E.5.4](#)



### Eclipses (2): Advanced

- Determine how the **average number of lunar eclipses** changes.
- Determine how the **average number of solar eclipses** changes.
- Determine how the **possibility of viewing a lunar eclipse** changes.
- Determine how the **possibility of viewing a solar eclipse** changes.

[SC.912.E.5.4](#)



### Lunar Phases (1): Introduction

- Determine how the **location of the observer** impacts the **percent of the Moon lit up**.
- Determine how the **orbital speed of the moon** impacts the **duration of lunar orbit**.
- Determine how the **position of the moon** impacts the **percent of the Moon facing the Sun**.

[SC.8.E.5.9](#)

[SC.912.E.5.4](#)



### Lunar Phases (2): Advanced

- Determine how the **duration of lunar orbit** changes.
- Determine how the **percent of the Moon facing the Sun** changes.
- Determine how the **percent of the Moon lit up** changes.

[SC.912.E.5.4](#)



### Convergent (1): Introduction

- Investigate how the **duration of plate movement** impacts the **formation heights at the convergent boundary**.
- Investigate how **plate size** impacts the **number of earthquakes at the convergent boundary**.
- Determine how the **plate type** affects the **formation type**.

[SC.7.E.6.4](#)

[SC.7.E.6.5](#)

[SC.7.E.6.7](#)

[SC.912.E.6.3](#)



### **Convergent (2): Advanced**

[SC.912.E.6.3](#)

- Determine the impact of the **duration of plate movement**.
- Investigate what affects the **formation type at the convergent boundary**.
- Investigate what affects the **number of earthquakes**.



### **Divergent (1): Introduction**

[SC.7.E.6.4](#)

[SC.7.E.6.5](#)

[SC.7.E.6.7](#)

[SC.912.E.6.3](#)

- Determine how the **convection current speed** affects the **spreading rate**.
- Today, your geologist team is taking measurements near a divergent boundary. Investigate how the **distance from the spreading center** is related to the **age of crust**.
- Determine how the **plate type** affects the **formation type**.



### **Divergent (2): Advanced**

[SC.912.E.6.3](#)

- Investigate what affects the **age of crust**.
- Investigate what affects the **formation observed at the divergent boundary**.
  - Investigate what affects the **spreading rate at the divergent boundary**.



### **Seasons (1): Introduction**

[SC.8.E.5.9](#)

[SC.912.E.5.4](#)

- Determine how the **location of the observer on Earth** affects the **angle of sunlight**.
- Determine how the **tilt of the Earth** affects the **average temperature**.
  - Determine how the **location of Earth in orbit** affects the **distance of Earth from the Sun**.



### **Seasons (2): Advanced**

[SC.912.E.5.4](#)

- Determine how the **angle of sunlight** changes.
- Determine how the **average temperature** changes.
  - Determine how the **distance of Earth from the Sun** changes.



### **Seasons - Earth has NO Tilt! Introduction**

[SC.8.E.5.9](#)

[SC.912.E.5.4](#)

- If the Earth has no tilt, determine how the **location of Earth in orbit** affects the **average temperature**.
- If the Earth has no tilt, determine how the **location of Earth in orbit** affects the **distance of Earth from the Sun**.
  - If the Earth has no tilt, determine how the **location of the observer** affects the **angle of sunlight**.



### **Seasons- Earth has NO Tilt! Advanced**

[SC.8.E.5.9](#)

[SC.912.E.5.](#)

- If the Earth has no tilt, determine how the **angle of sunlight** can change.
- If the Earth has no tilt, determine how the **average temperature** can change.
  - If the Earth has no tilt, determine how the **distance of Earth from the Sun** can change.



### **Weather (Coming Soon)**

- Determine how the **air temperature** affects the **severity of the storm**.
- Determine how the **atmospheric temperature** affects the **severity of the storm**.
  - Determine how the **speed of the storm front** affects the **duration of the storm**.
  - Determine how the **humidity** affects the **total precipitation**.